


naam:.....




teken bij wat ontbreekt en los op.


$$3 + 1 = \dots$$




$$2 + 2 = \dots$$



$$4 + 2 = \dots$$




$$2 + 3 = \dots$$



$$1 + 5 = \dots$$



$$4 + 0 = \dots$$



naam: .....




## rekenverhaaltjes




$$\dots + \dots = \dots$$

$$\dots - \dots = \dots$$



$$\dots - \dots = \dots$$

$$\dots + \dots = \dots$$



$$\dots - \dots = \dots$$

$$\dots + \dots = \dots$$